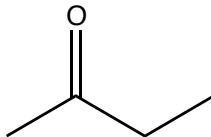


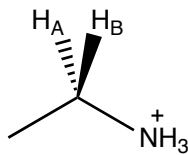
NAME: _____

Quiz 6

1. The top of this sheet (e.g., the one that you are writing on) is the *re* or the *si* face of the following sp^2 hybridized carbon?



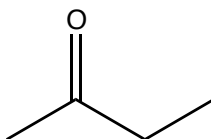
2. Is H_A the *pro-R* or *pro-S* hydrogen?



NAME: _____

Quiz 6

1. The top of this sheet (e.g., the one that you are writing on) is the *re* or the *si* face of the following sp^2 hybridized carbon?



2. Is H_A the *pro-R* or *pro-S* hydrogen?

